

Q 1.

In which year India was declared Polio-free?

- A 1998
C 2008

- B 2014
D 1979

Q 2.

Which of the following mountain range separates Kashmir Valley from Jammu region?

- A Karakoram
C Pir Panjal

- B Nun Kun
D Zaskar

Q 3.

Which of the following is the correct sequence of passes located in North to South direction?

- A Zoji La- Khardung- Bara Lachha La- Banihal

- B Khardung- Banihal- Zoji La- Bara Lachha La-
C Zoji La- Banihal- Bara Lachha La- Khardung
D Khardung- Zoji La- Banihal- Bara Lachha La-

Q 4.

Which of the following is/are correctly matched pair(s) -

District	Lake
1. Jammu	Dool
2. Bandipora	Manasbal
3. Udhampur	Mansar
4. Kishtwar	Suksar

- A Only 1 and 2
C Only 3 and 4

- B Only 2 and 3
D Only 1 and 4

Q 5.

Kandi land is characterized by numerous torrents, hilly soils and scarcity of water. It lies between:

- A Ravi and Chenab rivers
C Ravi and Beas rivers

- B Jhelum and Chenab rivers
D Indus and Jhelum rivers

Q 6.

In which year the All India Harijan Sangh was founded?

- A 1921
C 1932

- B 1929
D 1937

Q 7.

Rabindranath Tagore renounced his knighthood in protest of-

- A Jallianwala Bagh Massacre
C Civil Disobedience Movement

- B Non-Cooperation Movement
D Montagu-Chelmsford Reforms

Q 8.

Which of the following district has lowest sex ratio in the UT of Jammu & Kashmir (As per 2011 Census)?

- A Rajouri
C Ganderbal

- B Kupwara
D Poonch

Q 9.

Yakshagana, a rich folk dance-drama in which women artists do not participate, is popular in which of the following state?

- A Telangana
C Himachal Pradesh

- B Karnataka
D Rajasthan

JK StudyPulse

Q 10.

Who has been appointed as new Cabinet Secretary of India, effective from 30th August 2024?

A Pradeep Kumar Sinha B Rajiv Gauba
C T V Somanathan D T. R. Prasad

Q 11.

Which of the following state is not covered under Government of India's 'Purvodaya' plan as announced in Union Budget 2024?

- A Bihar B Jharkhand
C Odisha D Chhattisgarh

Q 12.

Which of the following gives 'Global Gender Gap Index' ranking to the countries of the world?

- A UN Human Rights Council B World Economic Forum
C WIJO D UNESCO

Q 13.

Right to vote in India is a-

- A Legal Right B Fundamental Right
C Constitutional Right D None

Q 14.

"Chokuwa Rice" is a special class of semi-glutinous winter rice. Which state has received a Geographical Indication (GI) tag for Chokuwa rice?

- A Assam B Tamil Nadu
C Andhra Pradesh D Manipur

Q 15.

Which of the following is the correct sequence of glaciers located in west to east direction?

- A Hispar- Baltora- Biafo- Siachen B Siachen- Hispar- Biafo- Baltora
C Hispar- Biafo- Baltora- Siachen D Baltora- Siachen- Biafo- Hispar

Q 16.

By Whom, the 1857 revolt was interpreted as a "planned war of national independence"?

- A Dr. S. N. Sen B Dr. R. C. Majumdar
C V. D. Savarkar D Sir John Seeley

Q 17.

Match the following institutes in correct manner to their locations--

Institute of national importance

- (a) Institute of Nuclear Medicine and Allied Sciences (INMAS)
(b) Centre for Artificial Intelligence and Robotics (CAIR)
(c) Defence Research & Development Establishment (DRDE)
(d) Integrated Test Range (ITR)

Place

- (i) Delhi
(ii) Chandipur
(iii) Bengaluru
(iv) Gwalior

- A a- i b- iv c- iii d- ii B a- ii b- iii c- iv d- i
C a- i b- iii c- iv d- ii D a- iv b- i c- ii d- iii

Q 18.

"Usta art", also known as Gold nakashi work due to the prominence of golden colour, is practiced on camel hide and wood. Which state/UT has got a Geographical Indication (GI) tag for the art?

- A Uttar Pradesh B Rajasthan
C Madhya Pradesh D Gujrat

Guess

Series-A

Post Assistant-cum-Typist (Post code: 78)

Q 19.

Which of the following nations is not a part of BIMSTEC- Bay of Bengal Initiative for Multi-Sectoral Technical and Economic Cooperation?

- A Thailand
B Nepal
C Bhutan
D Vietnam

Q 20.

Which country has set to export electricity from Tala and Chukha Hydropower Projects to India?

- A Nepal
B China
C Bhutan
D Myanmar

Q 21.

A Memorandum of Understanding (MoU) on "Enhancing Innovation Ecosystems through an Innovation Handshake" under the framework of bilateral Commercial Dialogue was signed in November 2023 between which of the two countries?

- A India- USA
B China- Russia
C India- Russia
D Israel- Ukraine

Q 22.

Which of the following is not correct about "PM Surya Ghar Muft Bijli Yojana"?

- A It aims to light up 1 crore households by providing upto 300 units of free electricity every month.
B Under the scheme, households will be provided with a subsidy cover of 40 per cent to install solar panels on their roofs.
C The scheme will promote the use of renewable energy.
D The scheme was launched in November 2023.

Q 23.

Which of the following statement(s) is/are correct regarding Zika virus borne diseases?

1. Its infection during pregnancy can cause infants to be born with microcephaly.
2. Zika virus is transmitted primarily by Aedes mosquitoes.
3. It is also transmitted through sexual contact.
4. It can not be transmitted through transfusion of blood.

- A 1 and 2 only
B 2 and 3 only
C 1, 2 and 3 only
D All of the above

Q 24.

Find out the incorrect pair among the following -

Convention/ Protocol	Subject/Related to
1. Cartagena Protocol	Biosafety to the Convention on Biological Diversity
2. Nagoya Protocol	Protection of health and the environment from the adverse effects of mercury.
3. Ramsar Convention	Protection and conservation of wetlands
4. Kyoto Protocol	Transboundary Movements of Hazardous Wastes and their Disposal.

- A Only 1 and 2
B Only 2 and 3
C Only 2 and 4
D Only 1 and 3

Q 25.

Which of the following threatened animal is endemic to UT of Jammu & Kashmir?

- A Hangul or Kashmir Red Deer
B Kashmir Musk Deer
C Snow Leopard
D Himalayan Tahr or Kras

Q 26. We walked _____ the park.

- ~~A~~ through
C on

- B above
D away

Q 27. The past participle of 'bring' is:

- ~~A~~ brought
C brang

- B bringed
D brung

Q 28. Which verb tense is used to express a future action?

- A present perfect
~~C~~ future simple

- B past perfect
D present continuous

Q 29. Complete the sentence with the correct verb form. "If I had known, I _____ helped you."

- ~~A~~ Would have
C Would

- B Will
D Had

Q 30. Identify the correct spelling:

- A miscellaneous
~~C~~ miscellaneous

- B miscellanious
D miscellaneus

Q 31. Which spelling is correct?

- A occurence
~~C~~ occurrence

- B occurance
D occurance

Q 32. Choose the correct spelling:

- A privelege
~~C~~ privilege

- B priveledge
D privilegge

Q 33. The antonym for "practical" is:

- A practicalless
~~C~~ impractical

- B illpractical
D nopractical

Q 34. Synonym for 'intransigent'.

- A flexible
C obstinate

- B compromising
D yielding

Q 35. Antonym of 'laudatory'.

- A critical
C admiring

- B praising
D complimentary

Q 36. She is proficient _____ playing the piano.

- A of
C on

- ~~B~~ at
D with

Q 37. The book is divided _____ chapters.

- ~~A~~ into
C with

- B by
D on

JK StudyPulse

- Q 38. The passive voice of "They are building a new bridge" is:
☒ A A new bridge is being built by them. ☐ B A new bridge is built by them.
☐ C A new bridge has been built by them. ☐ D A new bridge will be built by them.

- Q 39. Which verb tense is used to express a habitual action?
☐ A Present perfect ☐ B Past perfect
☒ C Present simple ☐ D Future continuous

- Q 40. Correct spelling is _____
☐ A questionnaire ☐ B questionair
☒ C questionnaire ☐ D questionairre

- Q 41. What does the idiom "to burn the candle on both ends" mean?
☐ A To clean up a mess ☐ B To reveal a secret.
☐ C To be very angry ☒ D To live in an unsustainable manner.

- Q 42. The idiom "to let the cat out of the bag" means:
☐ A To buy a cat ☒ B To reveal a secret
☐ C To be in trouble ☐ D To be very lazy

- Q 43. The idiom "to kick the bucket" means:
☒ A To die ☐ B To be happy
☐ C To be angry ☐ D To be successful

- Q 44. Choose the correct tense form to complete the sentence.
 I _____ (watch) TV when the phone rang.
☒ A Was watching ☐ B watched
☐ C Have been watching ☐ D Will be watching

- Q 45. Choose the correct tense form to complete the sentence.
 She _____ (study) for three hours before she went to bed.
☐ A Has studied ☒ B Had studied
☒ C studies ☐ D Will study

- Q 46. Choose the right order to make a meaningful sentence: Does not care to (1)/ a book that a person (2)/ is very probably (3)/ not much worth (4)/ of education and good taste (5)/ read more than once (6).
☒ A 2, 1, 6, 3, 4, 5 ☐ B 2, 6, 3, 4, 5, 1
☒ C 2, 5, 3, 4, 1, 6 ☐ D 2, 5, 1, 6, 3, 4

- Q 47. Choose the right order to make a meaningful sentence: Increasing part (1)/ certainly machines (2)/ an ever (3)/ are playing (4)/ in our lives (5).
☐ A 2, 5, 4, 3, 1 ☒ B 2, 3, 4, 1, 5
☒ C 2, 4, 3, 1, 5 ☐ D 5, 4, 3, 2, 1

- Q 48. Could you tell me.....?
☐ A where is the bus stop ☒ B where the bus stop is
☐ C is where the bus stop ☐ D the bus stop is where

Q 49. How long have they there?

- A Waiting ☒ B Been waiting
C Been waited D Waited

Q 50. If I had more time, I do more exercise.

- ☒ A Would B Will
C Am going to D Want to

Q 51. In the following question, four groups of three numbers are given. In each group the second and third number are related to the first number by a Logic/Rule/Relation. Three are similar on basis of same Logic/Rule/Relation. Select the odd one out from the given alternatives.

- ☒ A (49, 45, 39) B (73, 68, 63)
C (94, 89, 84) D (66, 61, 56)

Q 52. Three of the following four letter-clusters are alike in a certain way and one is different. Pick the odd one out.

- ☒ A DGL B KOS
C BFJ D MQU

Q 53. S is son of M. R is the father of Q and A. A is the daughter of M. How is A related to S?

- A Aunt B Daughter
C Sister D Mother

Q 54. Which number will replace the question mark (?) in the following series?

- 12, 22, 42, 72, ?
A 102 B 112
C 92 D 122

Q 55. Three of the following four letter clusters are alike in a certain way and one is different. Pick the odd one out.

- A HLP T B CGKQ
C DHP P D XBFJ

Q 56. In a family of 5 members, X is the sister of Y. M has two children and he is the son of E, who is the father-in-law of H. H has only one son. Y is not the grand-daughter of E. How is X related to E?

- ☒ A Grand-daughter B Grandson
C Daughter D Sister

Q 57. Study the following information carefully to answer the given question:

M@N means M is the wife of N

M#N means M is the son of N

M%N means M is the Sister of N

M\$N means M is the father of N

Which of the following expression shows I as the brother of H?

- A H#PSI B H%PSI
C I%ISP D H%ISP

$$\frac{213 \times 5}{1065}$$



$$\frac{82 \times 2}{164}$$

$$\frac{72 \times 2}{144}$$

Q 58.

Rahul is the son of Mohan. Mohan is the father of Manu. Rahul is married to Dina. Rahul and Manu are siblings. Kana is the brother of Dina. Mohan has only one son. Nehal is the son of Rahul. Kanav is the father of Akash. How is Mohan related to Nehal?

- A Sister B Grand Father
C Grand Mother D Father



$$\frac{45 \times 5}{215}$$

Q 59.

Introducing a lady in party Goldy told her friend, "She is sister-in-law of my only brother who is father of Ganesh who is grandson of Navya's husband who is my father who have only two children." How is Ganesh related to that lady?

- A Brother B Nephew
C Sister D Can't be determined

$$9 \times 5 = 45$$

Q 60.

Which number will replace the question mark (?) in the following series?

5, 9, 18, 43, 92, 213, 382, ?

- A 382 B 671
C 328 D 617

$$\begin{array}{r} 14 \cdot 38 \cdot 58 \\ 24 \cdot 20 \end{array}$$

Q 61.

Select the set in which the numbers are related in the same way as are the numbers of the following set.

(4, 10, 23)

- A (7, 23, 49) B (2, 6, 15)
C (3, 7, 17) D (4, 12, 21)

JK StudyPulse

$$\begin{array}{r} 29 \\ 9 \\ \hline 26 \end{array}$$

$$\begin{array}{r} 51 \\ 29 \\ \hline 22 \end{array}$$

Q 62.

Which number will replace the question mark (?) in the following series?

3, 14, 29, 38, 51, 58, 69, ?

- A 47 B 37
C 74 D 73

Q 63.

Which number will replace the question mark (?) in the following series?

16, 18, 21, 26, 33, ?

- A 45 B 43
C 40 D 44

Q 64.

If you are facing north-east and move 10 m forward, turn left and move 7.5 m, then you are

- A north of your initial position B south of your initial position
C 12.5 m from the initial position D Both A and C

Q 65.

9, 11, 16, 26, ?, 69

- A 40 B 43
C 44 D 47

Q 66.

6, 3.5, 4.5, 11, 48, ?

- A 365 B 376
C 392 D 405

$$\frac{6 \times 0.5}{3}$$

$$\frac{3.5 \times 0.5}{17.5}$$

$$\begin{array}{r} 26 \\ 17 \\ \hline 43 \end{array}$$

$$\begin{array}{l} 10^2 + 7.5^2 \\ 10^2 + 42.25 \\ 142.25 \end{array}$$

$$\begin{array}{r} 60 \\ 53 \\ \hline 16 \end{array}$$

$$125 \times 165$$

Q 67.

g b e h b e c - g b e h b e h

A c e g g e

C e g e g e

B e b g b e

D b e e g b

Q 68.

MZY3, NWW5, OTT7, POP11, ?

A QNL16

C QNK17

B NQK17

D VNU19

Q 69.

c b c b c c b c b c b h

A c c c b b

C b e b e h

B c b c b b

D b c b b c

Q 70.

Find the term which does not fit into the series.

1FG, 5JF, 9NE, 15RD, 17VC

A 15RD

C 9NE

B 17VC

D 5JF

Q 71.

Walking at the speed of 5 km/hr from his home, a geek misses his train by 7 minutes. Had he walked 1 km/hr faster, he would have reached the station 5 minutes before the actual departure time of the train. Find the distance between his home and the station.

A 5 km

C 3 km

B 6 km

D 2 km

Q 72.

To cover a certain distance, a geek had two options, either to ride a horse or to walk. If he walked one side and rode back the other side, it would have taken 4 hours. If he had walked both ways, it would have taken 6 hours. How much time will he take if he rode the horse both ways?

A 2 hrs


C 1 hrs

B 1.2 hrs

D 3 hrs

Q 73.

Select the figure from among the given options that can replace the question mark (?) in the following series.



A



C



B



D



$$W + R = 4$$

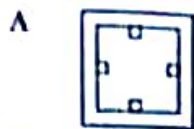
$$W + W = 6$$

$$R + R = ?$$

$$1 + 1 = 2$$

Q.74.

A paper is folded and cut as shown in the given question figures. When opened which of the four answer figures will it resemble?

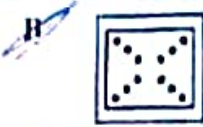


Q.75.

A piece of paper is folded and cut as shown below in the question figures. From the given answer figures, indicate how it will appear when opened?



JK StudyPulse



Q.76.

What does GUI stand for?

- A General User Interaction
C Graphical Utility Interface

- B Graphic User Interface
D General Utility Interface

Q.77.

What is the maximum digit used in a hexadecimal number system?

- A 8
C 14

- B 16
D 15

Q.78.

A rectangle symbol is used in a flow chart to represent

- A Process/Operation
C Condition test/Decision Making

- B Input/Output
D Start/Stop

Q.79.

Once an email has been sent to the recipients, it is moved from the folder to the folder.

- A Outbox, sent
C Inbox, sent

- B Inbox, outbox
D Outbox, inbox

Q.80.

Once an email has been marked as not spam, then it is moved from the folder to the folder.

- A Outbox, inbox
C Spam, inbox

- B Spam, trash
D Spam, outbox

- Q 81. The objects that are used in a Power Point Slides to hold the text are called
 A Auto layouts B Object holders
 C Text holders D ~~Place holders~~
- Q 82. The default file extension of a word document in MS Word 2007 or later is
 A .ppt B .xlsx
 C ~~.docx~~ D .pptx
- Q 83. To use exactly same font type, size, and colour in the title of all the slides in a Power Point Presentation, you will.....
 A Use slide sorter B Use file master
 C Use format brush and make title identical D ~~Use slide master~~
- Q 84. The default ip address of a local machine is 127.0.0.1 which is known as
 A Local B localmachine
 C ~~Localhost~~ D Localcast
- Q 85. Consider the following path "C:\Tom\Documents\Tds 1". What is name of the current logged-in user in this path?
 A C B Tds 1
 C ~~Tom~~ D Documents
- Q 86. The default method to assign an ip address to the connected clients by a mobile hot spot internet connection is
 A Static B ~~Dynamic~~
 C Semi Dynamic D Semi Static
- Q 87. If you want to send an email to multiple people without the receiver seeing the list of other recipients, then which of the following is best possible approach?
 A Include the other recipients email ID's in the carbon copy tab B ~~Include the other recipients email ID's in the blind carbon copy tab~~
 C Send email to first recipient and then forward that email to other recipients. D Send the email to all the recipients at once with their email ID's separated by a comma.
- Q 88. Which one is correct representation of binary value $(11100001.101)_2$ in decimal form?
 A 225.125 B ~~225.5~~
 C 225.625 D 225.0625
- Q 89. Which formula is used in MS Excel to find the total salary of the employees that are in column D, from rows 10 to 15 based on a condition that the values in column B is equal to "Teaching" with same row condition?
 A ~~=SUMIF(D10:D15,"Teaching",B10:B15)"~~ B ~~X~~ SUMIF(B10:B15,"Teaching",D10:D15)
 C SUMIF(B10:B15,"Teaching") D ~~X~~ "=SUMIF(D10:D15,"Teaching")"

- Q 90. The words are underline with red colour whereas the words/ sentences are underlined with green colour.
- A Grammatical Mistake, Misspelled
C Syntax error, Grammatical Mistake
~~B~~ Misspelled, Grammatical mistake
D Misspelled, Word not in dictionary error
- Q 91. Which of the following is designed to control the operations of a computer?
- A User
C System Software
B Application Software
D Utility Software
- Q 92. What does the symbol D represent in a hexadecimal number system?
- A 8
C 13
B 16
D 14
- Q 93. Which Google product allows you to collect data by survey, quiz, or questions from students with multiple choice, open-ended, and other questions?
- A Google Drawings
C Google Slides
B Google Forms
D Google Docs
- Q 94. LAN, WAN, and MAN are computer networks covering different areas. Their first alphabets L, W, and M respectively stands for
- A Local, World, Middle
C Local, Wide, Maximum
B Local, Wireless, Metropolitan
D Local, Wide, Metropolitan
- Q 95. Which generation of computers had used transistors?
- A First Generation
C Third Generation
B Second Generation
D Fourth Generation
- Q 96. The term GHz (GigaHertz) indicates which feature of a computer?
- A Speed
C Screen Resolution
B Storage
D Number of pixels
- Q 97. Which software is loaded first into computer main memory when you start a computer?
- A MS Office
C Application Software
B Utility Software
D Operating System
- Q 98. Which of the following is not a valid function of MS excel?
- A SUBTRACT()
C SUM()
B COUNT()
D COUNTA()
- Q 99. Which key combination is used in MS Excel to move the active cell to the beginning of the worksheet (A1)?
- A Home
C Ctrl + Home
B Shift + Home
D Alt + Home
- Q 100. Consider the following path "C:\Students\Documents\Docs 1". What is name of the file in this path?
- A C
C Students
B Docs 1
D Documents

A B C D E
10 11 12 13 14

JK StudyPulse